



Students' Name: _____ Section: _____ Date: _____

Topic: Addition

Bigger number in my mind. Smaller in my fingers. Go forward for Addition.

$$\begin{array}{r} \text{HTO} \\ 25 \\ + 94 \\ \hline \end{array}$$

$$\begin{array}{r} \text{HTO} \\ 67 \\ + 53 \\ \hline \end{array}$$

$$\begin{array}{r} \text{HTO} \\ 32 \\ + 49 \\ \hline \end{array}$$

$$\begin{array}{r} \text{HTO} \\ 36 \\ + 42 \\ \hline \end{array}$$

$$\begin{array}{r} \text{HTO} \\ 27 \\ + 42 \\ \hline \end{array}$$

$$\begin{array}{r} \text{HTO} \\ 14 \\ + 48 \\ \hline \end{array}$$

$$\begin{array}{r} \text{HTO} \\ 96 \\ + 47 \\ \hline \end{array}$$

$$\begin{array}{r} \text{HTO} \\ 68 \\ + 69 \\ \hline \end{array}$$

$$\begin{array}{r} \text{HTO} \\ 89 \\ + 39 \\ \hline \end{array}$$

$$\begin{array}{r} \text{HTO} \\ 95 \\ + 59 \\ \hline \end{array}$$

$$\begin{array}{r} \text{HTO} \\ 39 \\ + 94 \\ \hline \end{array}$$

$$\begin{array}{r} \text{HTO} \\ 47 \\ + 83 \\ \hline \end{array}$$

$$\begin{array}{r} \text{HTO} \\ 68 \\ + 59 \\ \hline \end{array}$$

$$\begin{array}{r} \text{HTO} \\ 56 \\ + 72 \\ \hline \end{array}$$

$$\begin{array}{r} \text{HTO} \\ 25 \\ + 62 \\ \hline \end{array}$$

$$\begin{array}{r} \text{HTO} \\ 16 \\ + 57 \\ \hline \end{array}$$

$$\begin{array}{r} \text{HTO} \\ 38 \\ + 98 \\ \hline \end{array}$$

$$\begin{array}{r} \text{HTO} \\ 59 \\ + 35 \\ \hline \end{array}$$

$$\begin{array}{r} \text{HTO} \\ 72 \\ + 69 \\ \hline \end{array}$$

$$\begin{array}{r} \text{HTO} \\ 84 \\ + 19 \\ \hline \end{array}$$



Students' Name: _____ Section: _____ Date: _____

Topic: Subtraction

Bigger number in my mind. Smaller in my fingers. Go backward for Subtraction.

HTO	HTO	HTO	HTO	HTO
95	67	98	86	77
- 24	- 53	- 45	- 42	- 52
<input type="text"/>	<input type="text"/>	<input type="text"/>	<input type="text"/>	<input type="text"/>

HTO	HTO	HTO	HTO	HTO
54	96	68	89	95
- 38	- 47	- 29	- 39	- 55
<input type="text"/>	<input type="text"/>	<input type="text"/>	<input type="text"/>	<input type="text"/>

HTO	HTO	HTO	HTO	HTO
73	85	46	72	37
- 14	- 79	- 19	- 65	- 18
<input type="text"/>	<input type="text"/>	<input type="text"/>	<input type="text"/>	<input type="text"/>

HTO	HTO	HTO	HTO	HTO
45	98	93	62	84
- 32	- 88	- 35	- 29	- 19
<input type="text"/>	<input type="text"/>	<input type="text"/>	<input type="text"/>	<input type="text"/>

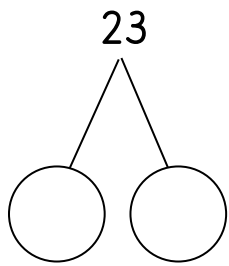


Students' Name: _____ Section: _____

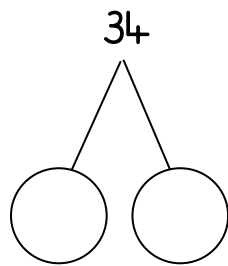
Date: _____

Topic: Partition to Add

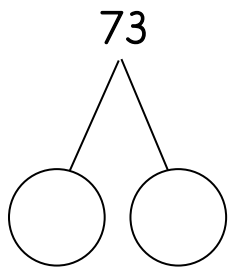
Bigger number in my mind.
Smaller in my fingers. Go
forward for Addition.



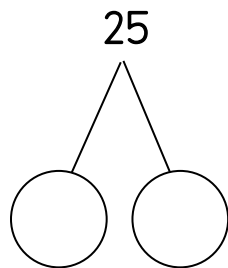
+



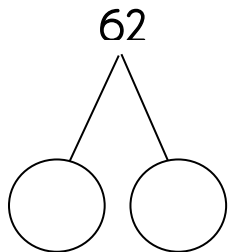
+ =



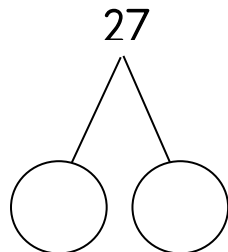
+



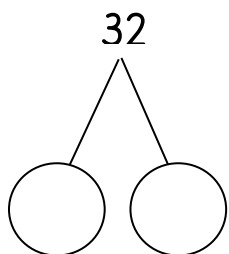
+ =



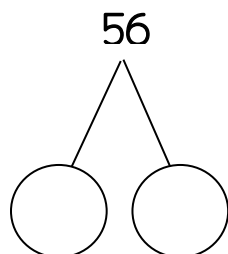
+



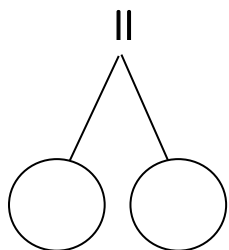
+ =



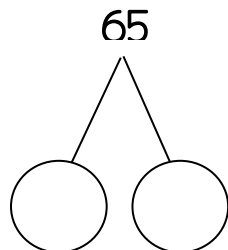
+



+ =



+



+ =

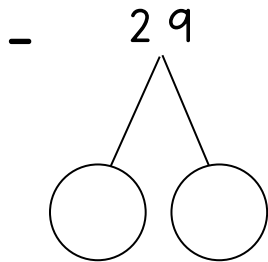
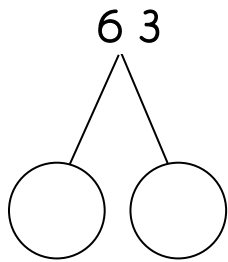


Students' Name: _____ Section: _____

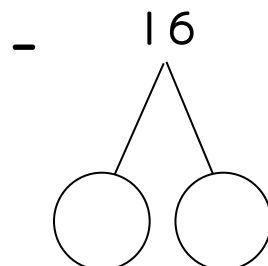
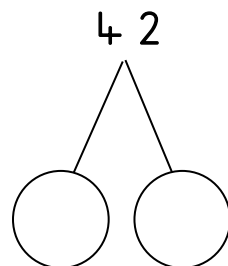
Date: _____

Topic: Partition to Subtract

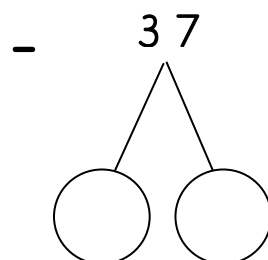
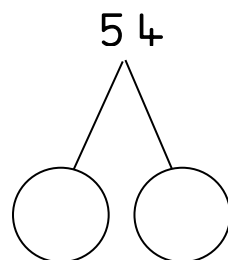
Bigger number in my mind.
Smaller in my fingers. Go
backward for Subtraction.



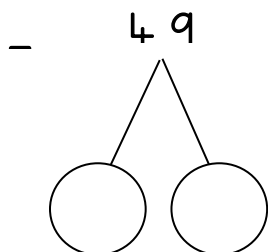
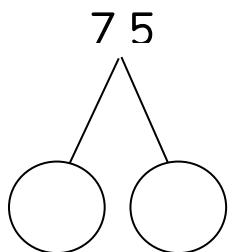
+ =



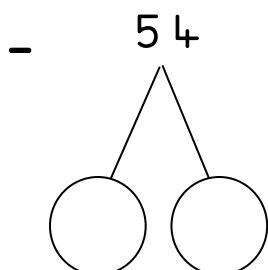
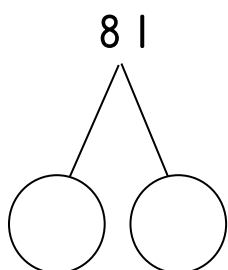
+ =



+ =



+ =



+ =

The City School

University Road Campus



Mathematics

Class 2

Self study plan day 1 Topic: Mental Math

Students' Name: _____ Section: _____ Date: _____

● Solve the following questions

1. Add $3 + 5 + 2$
2. What is the total of 65 and 4?
3. Subtract $88 - 5$
4. What is the difference between 25 and 10?
5. 5 7 are
6. 4 8 are
7. How many sides on 4 triangles?
8. Sara bought 16 candies and 4 chocolate bars. How many things altogether?
9. Which number is greater? 319 or 419
10. What is the spelling of 184?
11. Which number is lesser? 128 or 108
12. Ali has 35 animals stickers. He gave 5 to his friend. How many stickers are left now?
13. 6 8 are
14. What is the spelling of 159?
15. Which number is lesser? 309 or 319